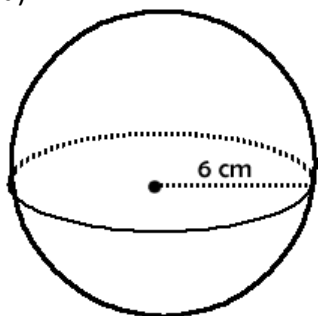


**Intro to Geometry** (G.GMD.3)  
**Unit Three: Spheres** (HW10)

Name: \_\_\_\_\_  
Date: \_\_\_\_\_ Period: \_\_\_\_\_

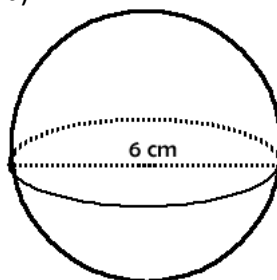
**1. Determine the volume of the solid.**

a)



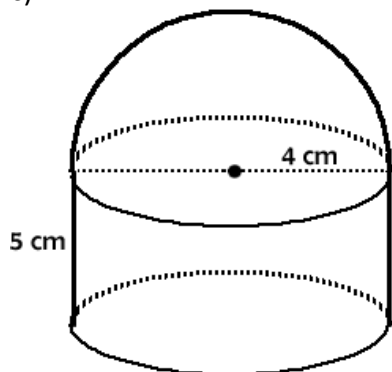
Volume = \_\_\_\_\_ (E)

b)



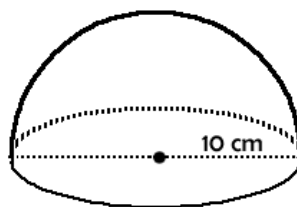
Volume = \_\_\_\_\_ (E)

c)



Volume = \_\_\_\_\_ (E)

d)



Volume = \_\_\_\_\_ (E)